
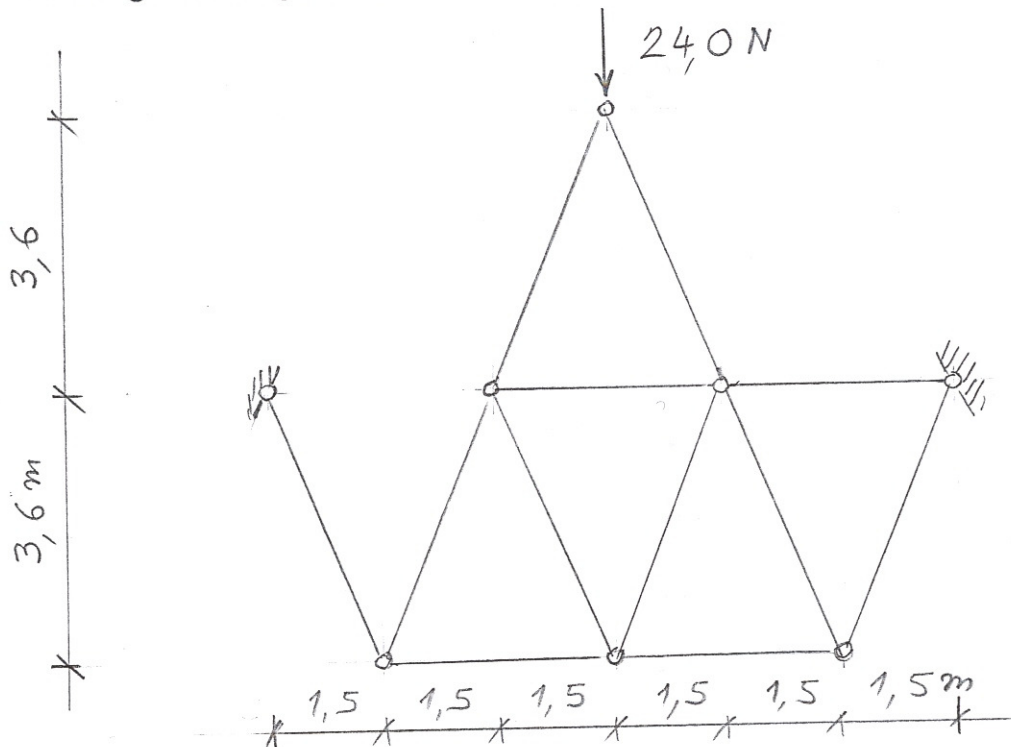


1. Zadan je vektor sile $\vec{F} = 21 \cdot \vec{i} - 17 \cdot \vec{j} - 9 \cdot \vec{k}$. Treba odrediti vektor momenta sile na točku T: \vec{M}_T^F , pri čemu je geometrijski vektor zadan: $\vec{l} = 4 \cdot \vec{i} - 5 \cdot \vec{j} + 6 \cdot \vec{k}$. Treba odrediti $|\vec{M}_T^F|$ i provesti kontrolu pomoću izraza koji povezuje apsolutne iznose: $|\vec{M}_T^F| = |\vec{l}| \cdot |\vec{F}| \cdot \sin \alpha$

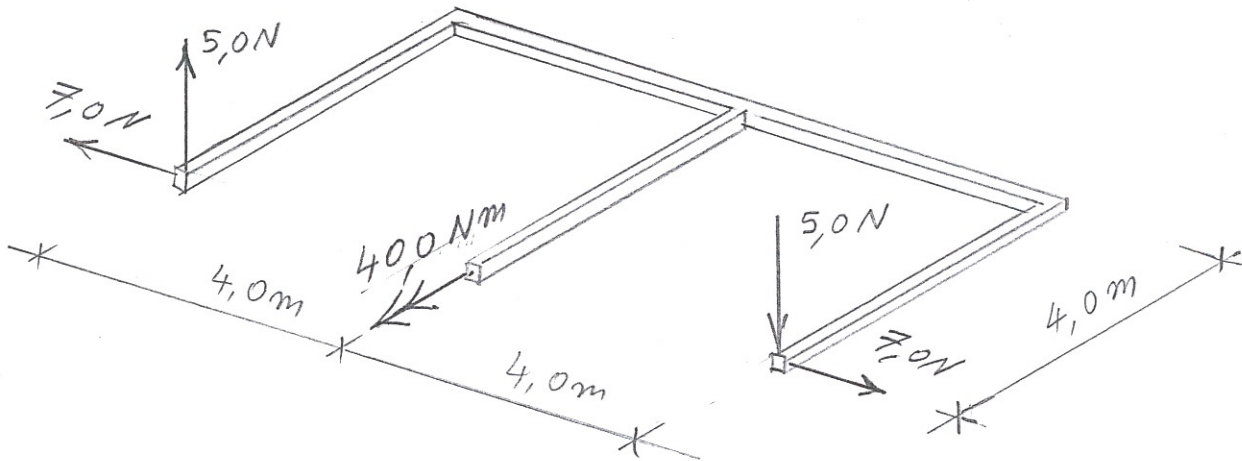
2. Treba samo kvalitativno, bez proračuna prikazati M dijagram prikazane konzole. Iz opterećenja i M dijagrama treba odrediti T dijagram. Analogno treba odrediti i N dijagram, te skicirati odgovarajuću orijentaciju djelovanja u spojevima. Treba crtati ravnalom.



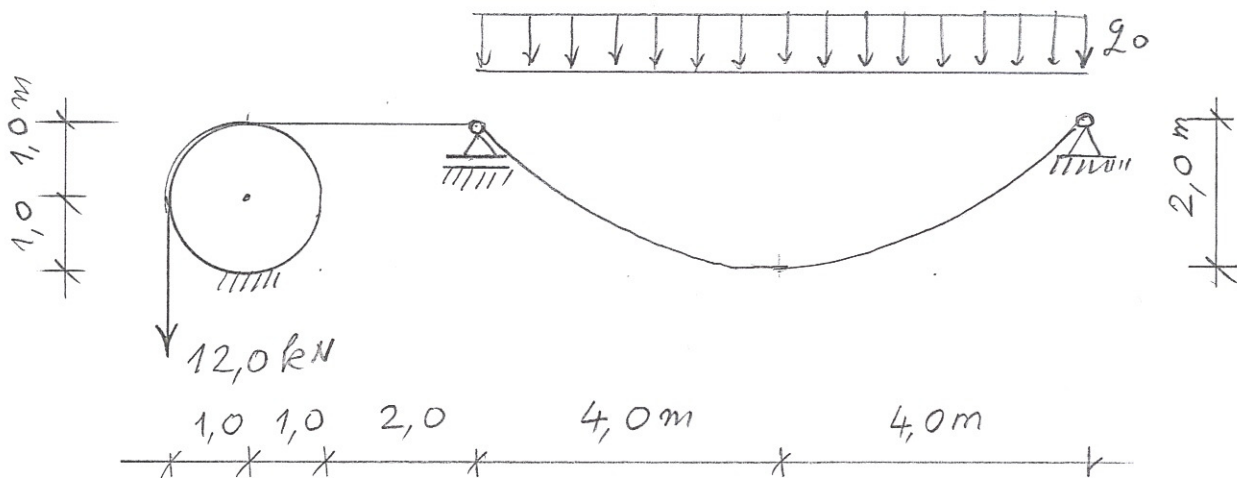
3. Treba na propisani način odrediti sile u zglobnim štapovima prikazanog ravninskog rešetkastog sustava koji se nalazi u ravnoteži, prikazati rješenje te provesti kontrole.



4. Treba aksonometrijski skicirati sljedeće dijagrame unutarnjih sila prikazanog štapa: M_1 , M_2 , M_t , N .
 M_1 se odnosi na savijanje u ravnini štapa. Priznat će se samo podaci korektno prikazani na dijagramima.



5. Prikazan sustav nalazi se u stanju ravnoteže. Koeficijent trenja između valjka i idealne niti koja je bez težine je zadan: $\mu_0 = 0,258128$. Nit jednim krajem djeluje na element pomičnog zgloba. Na taj je element spojena druga nit koja ima oblik parabolične lančanice. Opterećenje q_0 reducirano na horizontalu je konstantno. Treba odrediti minimalni i maksimalni iznos q_0 uz koje sustav još ostaje u ravnoteži. Rješenje je moguće i bez postavljanja analitičkih izraza za oblik lančanice.



$$1. \quad \vec{M}_T^F = \vec{r} \times \vec{F} = \begin{vmatrix} \vec{i} & \vec{j} & \vec{k} \\ 4 & -5 & 6 \\ 21 & -17 & -9 \end{vmatrix} =$$

$$= (45 + 102) \vec{i} + (-36 - 126) \vec{j} + (-68 + 105) \vec{k} =$$

$$= 147 \cdot \vec{i} - 162 \cdot \vec{j} + 37 \cdot \vec{k} \quad 3 \times \boxed{2}$$

$$|M_T^F| = \sqrt{147^2 + 162^2 + 37^2} = 221,8603 \quad \boxed{2}$$

$$|\vec{r}| = \sqrt{4^2 + 5^2 + 6^2} = 8,77496 \quad \boxed{2}$$

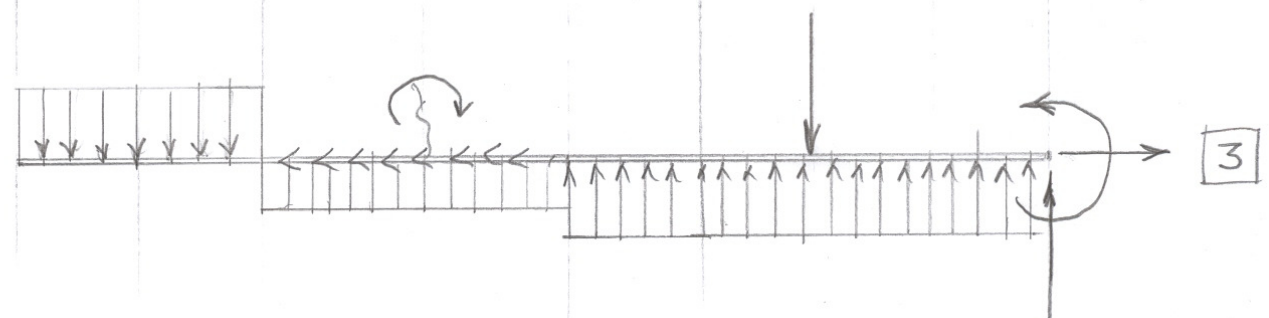
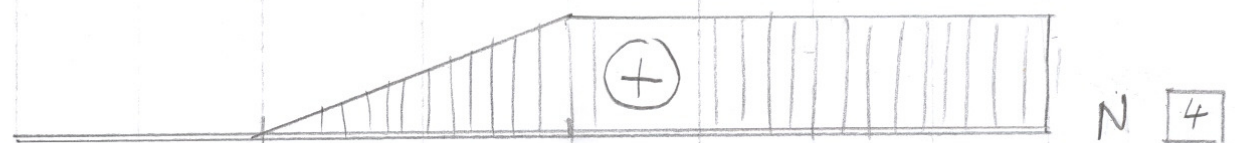

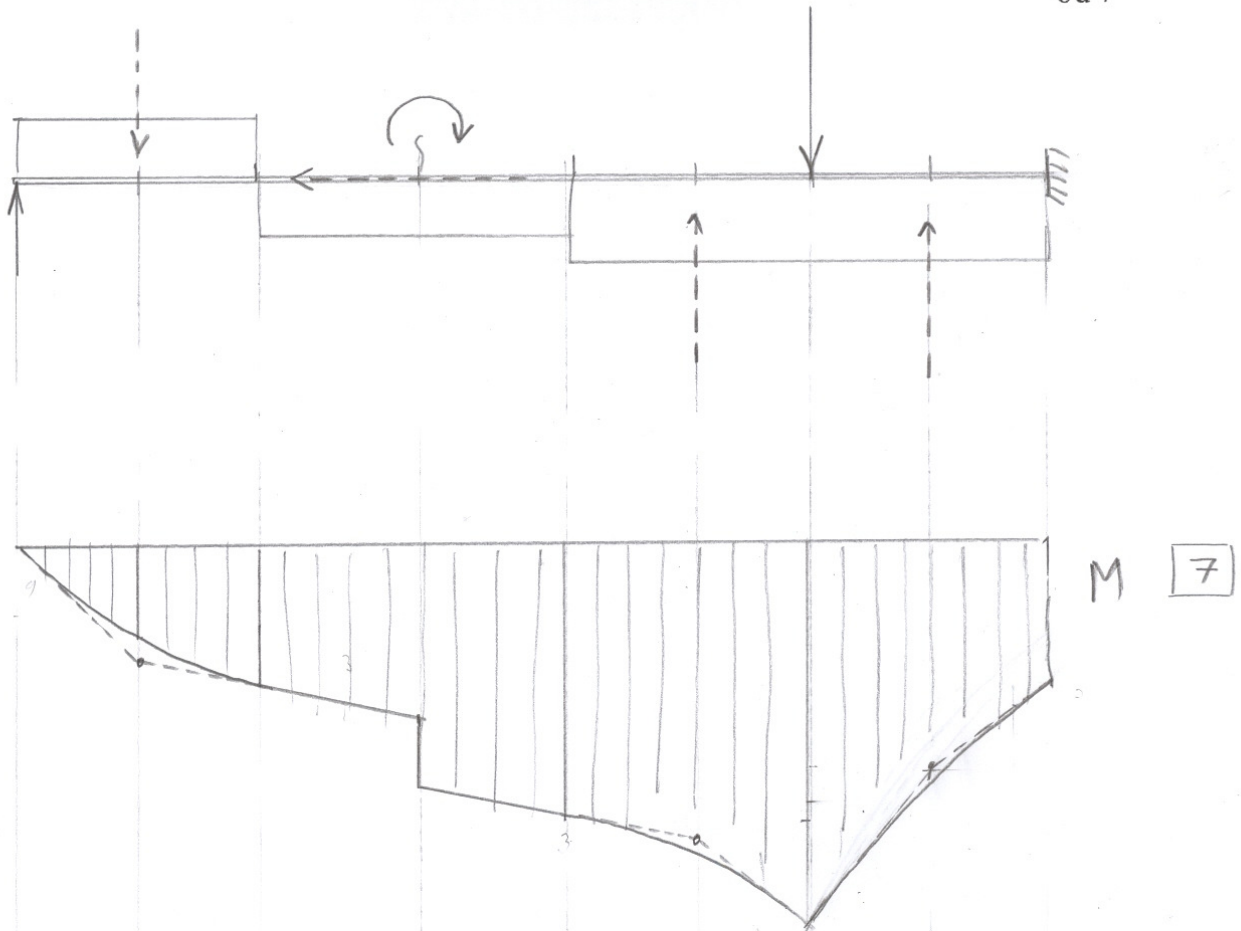
$$|\vec{F}| = \sqrt{21^2 + 17^2 + 9^2} = 28,47806 \quad \boxed{2}$$

$$\cos \alpha = \frac{\vec{r} \cdot \vec{F}}{|\vec{r}| \cdot |\vec{F}|} = \frac{4 \cdot 21 + (-5) \cdot (-17) + 6 \cdot (-9)}{|\vec{r}| \cdot |\vec{F}|}$$

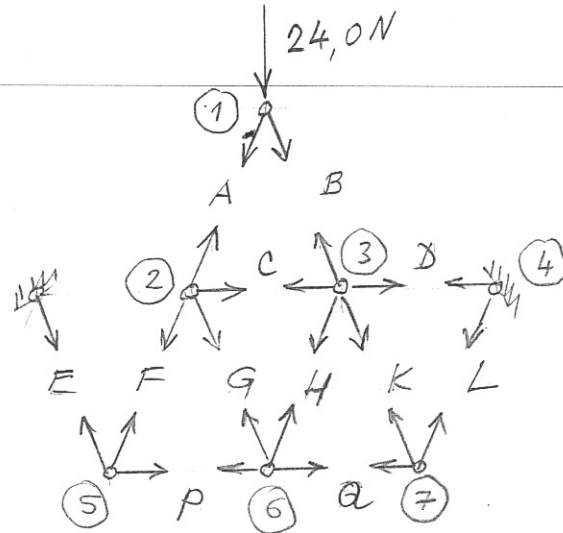
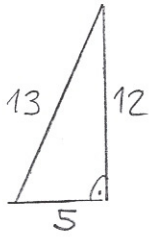
$$\cos \alpha = 0,460195 \quad \boxed{4}$$

$$\sin \alpha = \sqrt{1 - \cos^2 \alpha} = 0,887818 \quad \boxed{2}$$

$$|\vec{r}| \cdot |\vec{F}| \cdot \sin \alpha = 221,8602 \checkmark \quad \boxed{2}$$

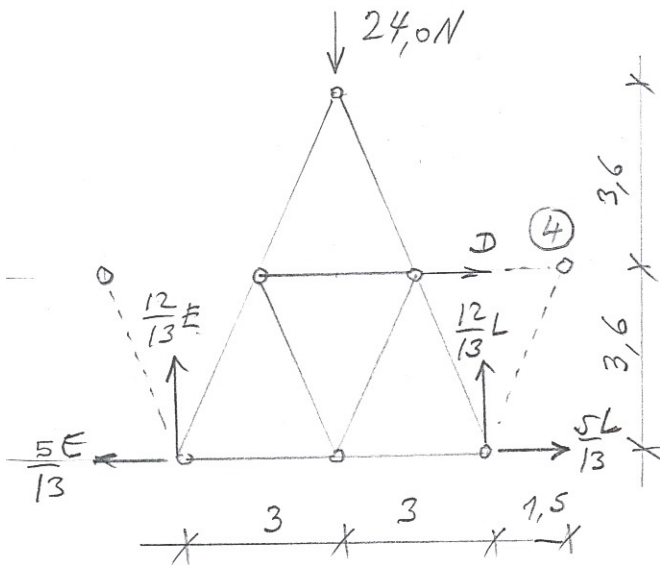


3.



2

RAVNOTEŽA REŠETKE (1, 2, 3, 5, 6, 7)



$$\sum M(4) = \phi$$

$$+ 4,5 \cdot 24 - E \left(7,5 \cdot \frac{12}{13} + 3,6 \cdot \frac{5}{13} \right) = \phi$$

$$E = 13,0 \text{ N} \quad [2]$$

$$\sum F_{yi} = \phi \quad [2]$$

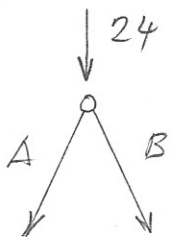
$$\frac{12}{13} E - 24 + \frac{12}{13} L = \phi; \quad L = 13,0 \text{ N}$$

$$\sum F_{xi} = \phi; \quad D = \frac{5}{13} E - \frac{5}{13} L = \phi \quad [1]$$

čvor 1

$$\sum F_{xi} = 0$$

$$-\frac{5}{13} A + \frac{5}{13} B = \phi \Rightarrow A = B \quad [1]$$



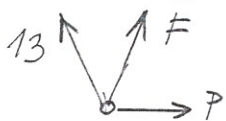
$$A = 13,0 \text{ N}$$

$$B = 13,0 \text{ N} \quad [1]$$

$$\sum F_{yi} = \phi; \quad -\frac{12}{13} A - \frac{12}{13} B - 24 = \phi$$

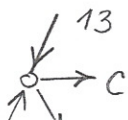
čvor 5

$$\sum F_{yi} = \phi; \quad \frac{12}{13} \cdot 13 + \frac{12}{13} \cdot F = \phi; \quad F = -13,0 \text{ N} \quad [1]$$



$$\sum F_{xi} = \phi; \quad -\frac{5}{13} \cdot 13 + \frac{5}{13} \cdot F + P = \phi; \quad P = +10,0 \text{ N} \quad [1]$$

čvor 2



SVE SILE OSIM C I G SE PONIŠTAVAJU.

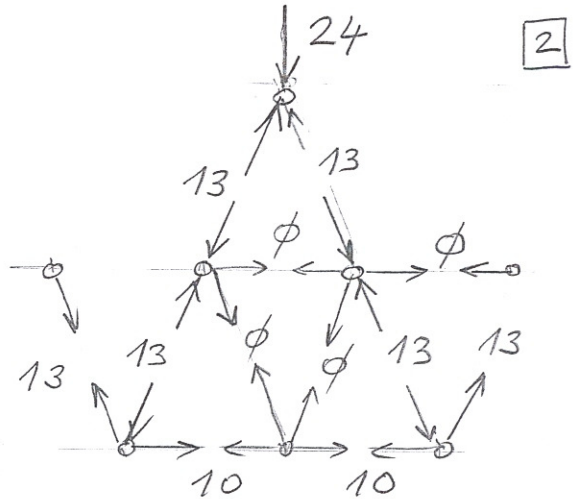
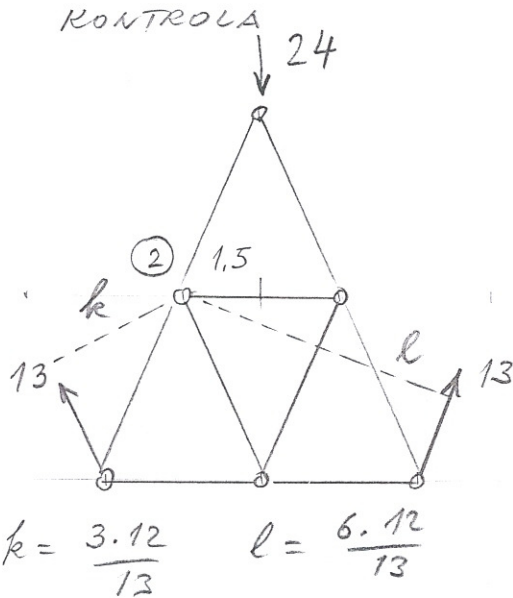
KAKO C I G NISU PARALELNE, SLIJEDI
 $C = \phi; \quad G = \phi.$

UZ SILU $D=0$, RASPORED MOBA BITI
SIMETRIČAN, PA SLJEDI: $H=0$; [1]

$K = -13,0 \text{ N}$ [1]

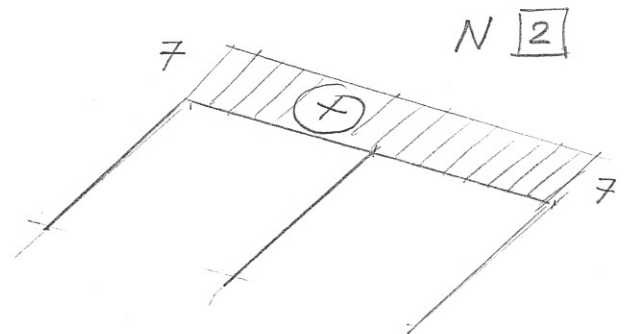
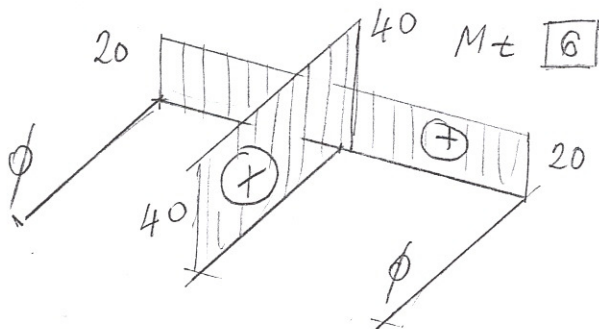
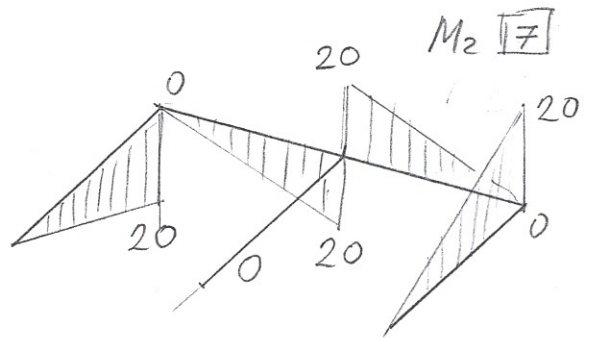
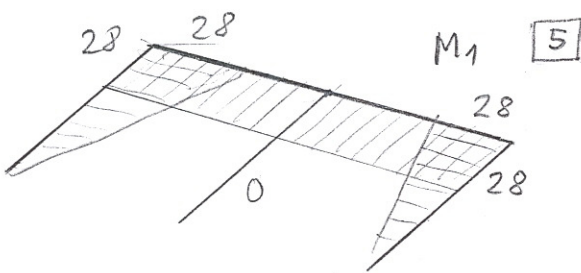
$Q = +10,0 \text{ N}$ [1]

STVARNA DJELOVANJA

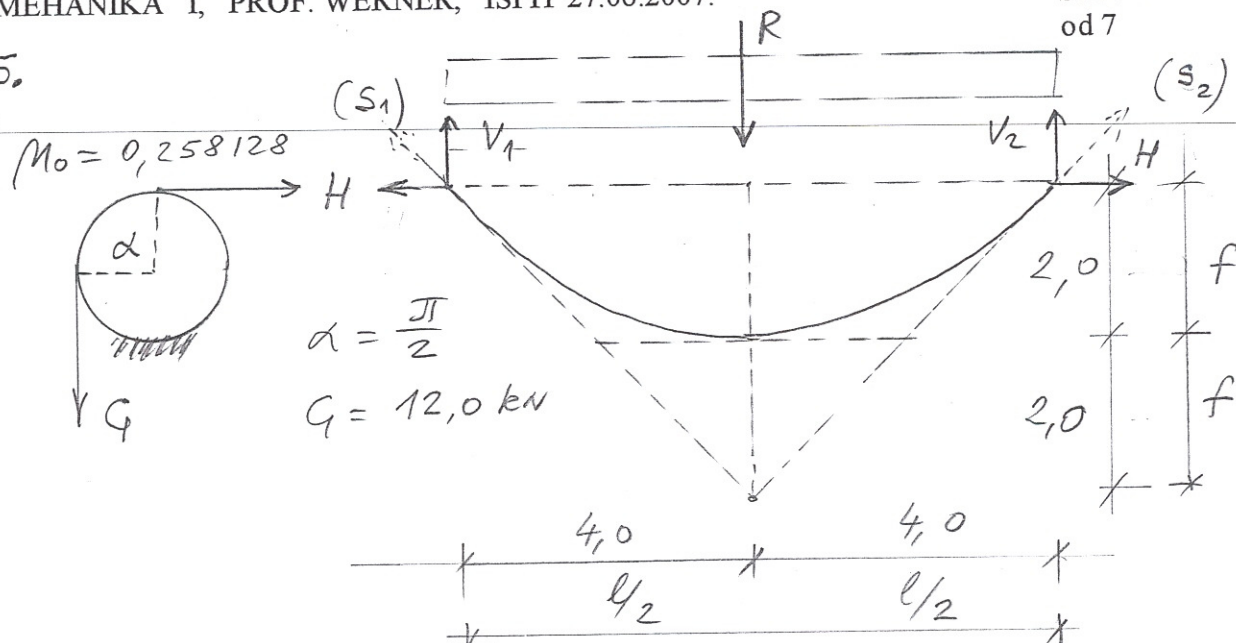


$\Sigma M(z) = -1,5 \cdot 24 - \frac{36}{13} \cdot 13 + \frac{72}{13} \cdot 13 = 0$ [2]

4.



5.



S_1 i S_2 LEŽE NA RUBNIM TANGENTAMA
 KOJE SE KOD KVADRATNE PARABOLE s
 POZNATOM SREDNJOJ ORDINATOM SISEKU
 U TOČKI KOJA JE ZA f UDALEJENA SREDNJE
 TOČKE.

$$a) H > G \quad H = G \cdot e^{\frac{\pi}{2} \cdot M_0} = 18,00 \text{ kN} \quad [3]$$

$$\frac{V_1}{2f} = \frac{H}{\frac{l}{2}}; \quad V_1 = H = 18,00 \text{ kN} \quad [3]$$

$$V_2 = V_1; \quad R = 2 \cdot V_1 = 36,00 \text{ kN} \quad [2]$$

$$g_{0,a} = \frac{36,00}{8,00} = 4,5 \frac{\text{kN}}{\text{m}} \quad [2]$$

$$b) H < G \quad H = \frac{G}{e^{\frac{\pi}{2} M_0}} = 8,00 \text{ kN} \quad [3]$$

$$\frac{V_1}{2f} = \frac{H}{\frac{l}{2}}; \quad V_1 = H = 8,00 \text{ kN} \quad [3]$$

$$V_2 = V_1; \quad R = 2 \cdot V_1 = 16,00 \text{ kN} \quad [2]$$

$$g_{0,b} = \frac{16,00}{8,00} = 2,0 \frac{\text{kN}}{\text{m}} \quad [2]$$